

INTEGRATED ALGEBRA

The University of the State of New York
REGENTS HIGH SCHOOL EXAMINATION

INTEGRATED ALGEBRA

Wednesday, August 18, 2010—8:30 to 11:30 a.m., only

Student Name: _____

School Name: _____

Print your name and the name of your school on the lines above. Then turn to the last page of this booklet, which is the answer sheet for Part I. Fold the last page along the perforations and, slowly and carefully, tear off the answer sheet. Then fill in the heading of your answer sheet.

This examination has four parts, with a total of 39 questions. You must answer all questions in this examination. Write your answers to the Part I multiple-choice questions on the separate answer sheet. Write your answers to the questions in Parts II, III, and IV directly in this booklet. All work should be written in pen, except graphs and drawings, which should be done in pencil. Clearly indicate the necessary steps, including appropriate formula substitutions, diagrams, graphs, charts, etc.

The formulas that you may need to answer some questions in this examination are found at the end of the examination. This sheet is perforated so you may remove it from this booklet.

Scrap paper is not permitted for any part of this examination, but you may use the blank spaces in this booklet as scrap paper. A perforated sheet of scrap graph paper is provided at the end of this booklet for any question for which graphing may be helpful but is not required. You may remove this sheet from this booklet. Any work done on this sheet of scrap graph paper will *not* be scored.

When you have completed the examination, you must sign the statement printed at the end of the answer sheet, indicating that you had no unlawful knowledge of the questions or answers prior to the examination and that you have neither given nor received assistance in answering any of the questions during the examination. Your answer sheet cannot be accepted if you fail to sign this declaration.

Notice...

A graphing calculator and a straightedge (ruler) must be available for you to use while taking this examination.

The use of any communications device is strictly prohibited when taking this examination. If you use any communications device, no matter how briefly, your examination will be invalidated and no score will be calculated for you.

DO NOT OPEN THIS EXAMINATION BOOKLET UNTIL THE SIGNAL IS GIVEN.

Part I

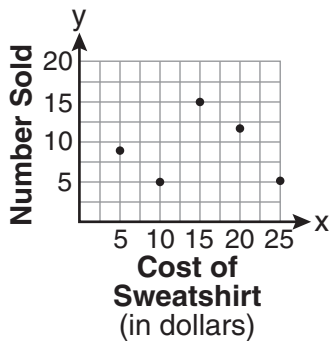
Answer all 30 questions in this part. Each correct answer will receive 2 credits. No partial credit will be allowed. For each question, write on the separate answer sheet the numeral preceding the word or expression that best completes the statement or answers the question. [60]

Use this space for computations.

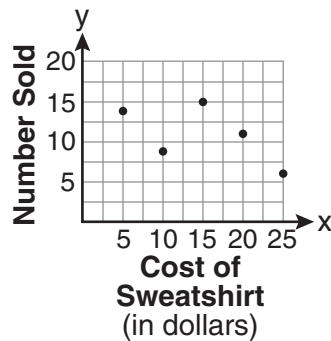
- 1 The school store did a study comparing the cost of a sweatshirt with the number of sweatshirts sold. The price was changed several times and the numbers of sweatshirts sold were recorded. The data are shown in the table below.

Cost of Sweatshirt	\$10	\$25	\$15	\$20	\$5
Number Sold	9	6	15	11	14

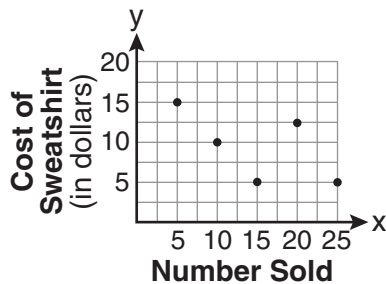
Which scatter plot represents the data?



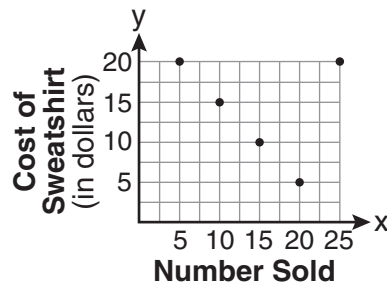
(1)



(3)



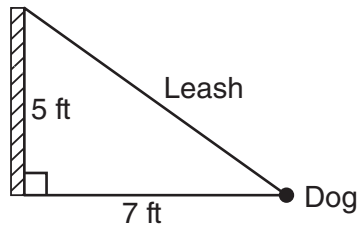
(2)



(4)

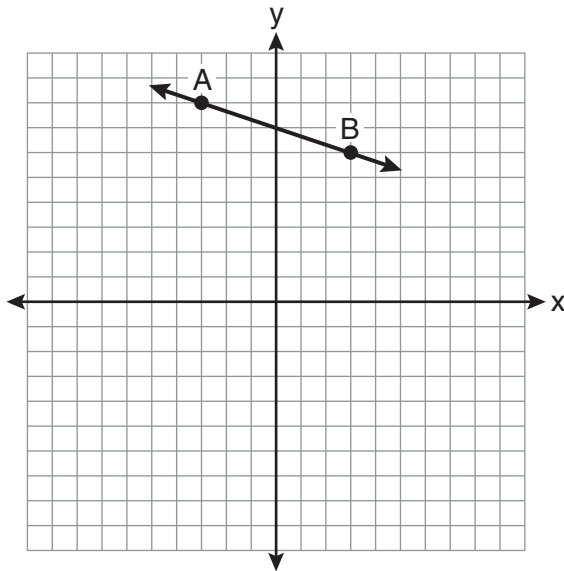
Use this space for
computations.

- 4 The end of a dog's leash is attached to the top of a 5-foot-tall fence post, as shown in the diagram below. The dog is 7 feet away from the base of the fence post.



How long is the leash, to the *nearest tenth of a foot*?

- (1) 4.9 (3) 9.0
(2) 8.6 (4) 12.0
- 5 What is the slope of the line passing through the points *A* and *B*, as shown on the graph below?



- (1) -3 (3) 3
(2) $-\frac{1}{3}$ (4) $\frac{1}{3}$

**Use this space for
computations.**

6 The quotient of (9.2×10^6) and (2.3×10^2) expressed in scientific notation is

- (1) 4,000 (3) 4×10^3
(2) 40,000 (4) 4×10^4

7 In a recent town election, 1,860 people voted for either candidate *A* or candidate *B* for the position of supervisor. If candidate *A* received 55% of the votes, how many votes did candidate *B* receive?

- (1) 186 (3) 1,023
(2) 837 (4) 1,805

8 Which expression is equivalent to $121 - x^2$?

- (1) $(x - 11)(x - 11)$ (3) $(11 - x)(11 + x)$
(2) $(x + 11)(x - 11)$ (4) $(11 - x)(11 - x)$

9 Given:

$$U = \{1, 2, 3, 4, 5, 6, 7, 8\}$$
$$B = \{2, 3, 5, 6\}$$

Set *B* is a subset of set *U*. What is the complement of set *B*?

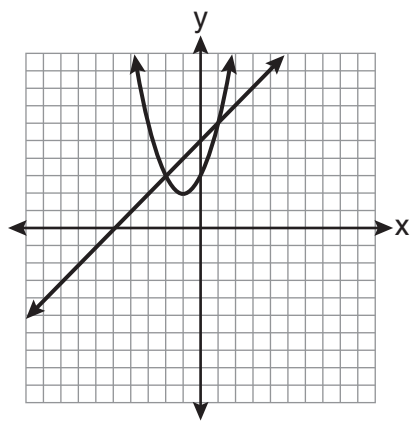
- (1) $\{ \}$ (3) $\{1, 4, 7, 8\}$
(2) $\{2, 3, 5, 6\}$ (4) $\{1, 2, 3, 4, 5, 6, 7, 8\}$

Use this space for
computations.

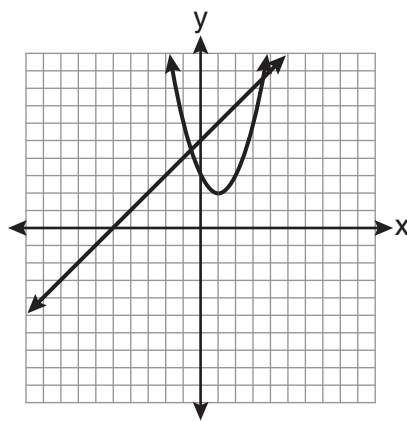
10 Which graph can be used to find the solution of the following system of equations?

$$y = x^2 + 2x + 3$$

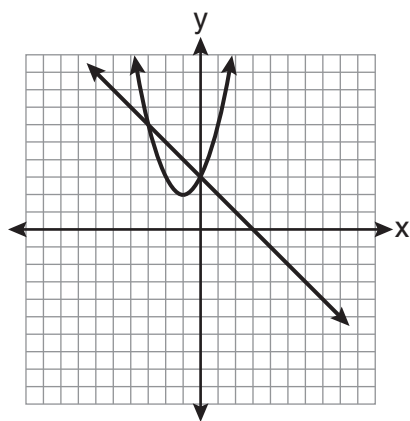
$$2y - 2x = 10$$



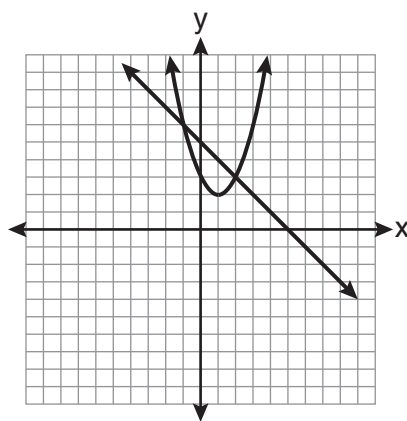
(1)



(3)



(2)



(4)

**Use this space for
computations.**

11 The width of a rectangle is 3 less than twice the length, x . If the area of the rectangle is 43 square feet, which equation can be used to find the length, in feet?

(1) $2x(x - 3) = 43$

(3) $2x + 2(2x - 3) = 43$

(2) $x(3 - 2x) = 43$

(4) $x(2x - 3) = 43$

12 Which value of x is the solution of $\frac{2x - 3}{x - 4} = \frac{2}{3}$?

(1) $-\frac{1}{4}$

(3) -4

(2) $\frac{1}{4}$

(4) 4

13 What is the perimeter of a regular pentagon with a side whose length is $x + 4$?

(1) $x^2 + 16$

(3) $5x + 4$

(2) $4x + 16$

(4) $5x + 20$

14 Which equation represents a line parallel to the y -axis?

(1) $x = y$

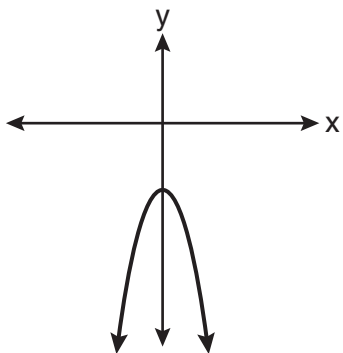
(3) $y = 4$

(2) $x = 4$

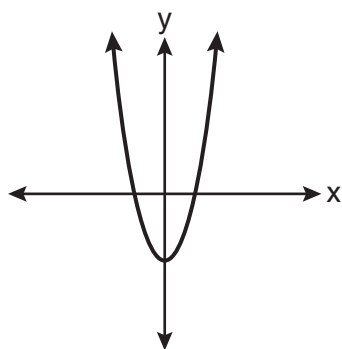
(4) $y = x + 4$

Use this space for
computations.

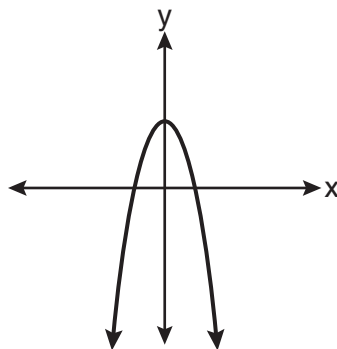
15 The diagram below shows the graph of $y = -x^2 - c$.



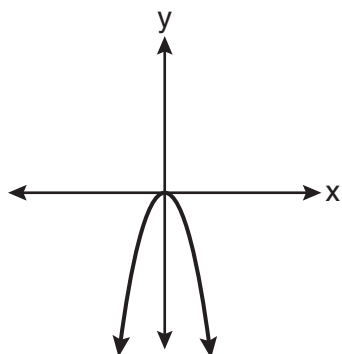
Which diagram shows the graph of $y = x^2 - c$?



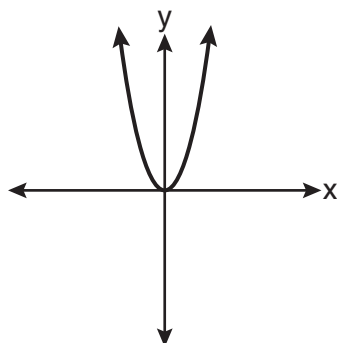
(1)



(3)



(2)



(4)

Use this space for
computations.

16 Which point lies on the line whose equation is $2x - 3y = 9$?

- (1) $(-1, -3)$
- (2) $(-1, 3)$
- (3) $(0, 3)$
- (4) $(0, -3)$

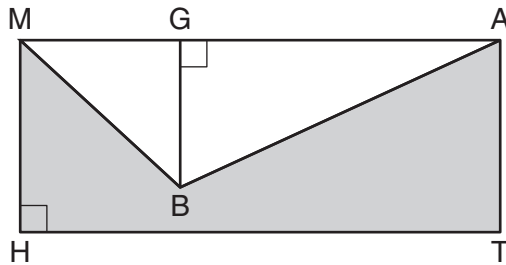
17 Which phrase best describes the relationship between the number of miles driven and the amount of gasoline used?

- (1) causal, but not correlated
- (2) correlated, but not causal
- (3) both correlated and causal
- (4) neither correlated nor causal

18 The height, y , of a ball tossed into the air can be represented by the equation $y = -x^2 + 10x + 3$, where x is the elapsed time. What is the equation of the axis of symmetry of this parabola?

- (1) $y = 5$
- (2) $y = -5$
- (3) $x = 5$
- (4) $x = -5$

19 In the diagram below, $MATH$ is a rectangle, $GB = 4.6$, $MH = 6$, and $HT = 15$.



What is the area of polygon $MBATH$?

- (1) 34.5
- (2) 55.5
- (3) 90.0
- (4) 124.5

Use this space for computations.

20 This year, John played in 10 baseball games. In these games he had hit the ball 2, 3, 0, 1, 3, 2, 4, 0, 2, and 3 times. In the first 10 games he plays next year, John wants to increase his average (mean) hits per game by 0.5. What is the total number of hits John needs over the first 10 games next year to achieve his goal?

- (1) 5
- (2) 2
- (3) 20
- (4) 25

21 What is the value of the y -coordinate of the solution to the system of equations $2x + y = 8$ and $x - 3y = -3$?

- (1) -2
- (2) 2
- (3) 3
- (4) -3

22 Which set-builder notation describes $\{-3, -2, -1, 0, 1, 2\}$?

- (1) $\{x \mid -3 \leq x < 2, \text{ where } x \text{ is an integer}\}$
- (2) $\{x \mid -3 < x \leq 2, \text{ where } x \text{ is an integer}\}$
- (3) $\{x \mid -3 < x < 2, \text{ where } x \text{ is an integer}\}$
- (4) $\{x \mid -3 \leq x \leq 2, \text{ where } x \text{ is an integer}\}$

**Use this space for
computations.**

23 Corinne calculated the area of a paper plate to be 50.27 square inches. If the actual area of the plate is 55.42 square inches, what is the relative error in calculating the area, to the *nearest thousandth*?

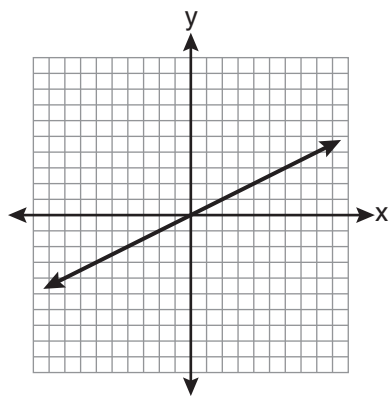
- (1) 0.092 (3) 0.102
(2) 0.093 (4) 0.103

24 The probability that it will snow on Sunday is $\frac{3}{5}$. The probability that it will snow on both Sunday and Monday is $\frac{3}{10}$. What is the probability that it will snow on Monday, if it snowed on Sunday?

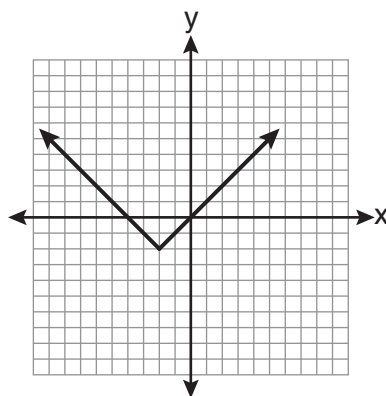
- (1) $\frac{9}{50}$ (3) $\frac{1}{2}$
(2) 2 (4) $\frac{9}{10}$

Use this space for
computations.

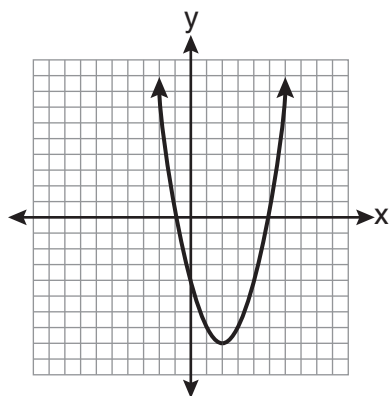
25 Which graph represents an exponential equation?



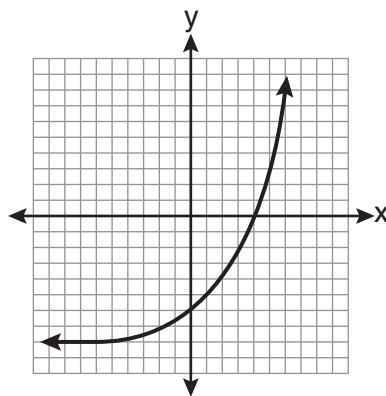
(1)



(3)



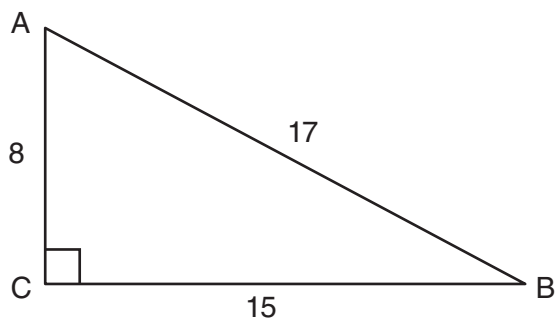
(2)



(4)

**Use this space for
computations.**

- 26** Right triangle ABC has legs of 8 and 15 and a hypotenuse of 17, as shown in the diagram below.



The value of the tangent of $\angle B$ is

- (1) 0.4706 (3) 0.8824
(2) 0.5333 (4) 1.8750
- 27** What is $\frac{2+x}{5x} - \frac{x-2}{5x}$ expressed in simplest form?

- (1) 0 (3) $\frac{4}{5x}$
(2) $\frac{2}{5}$ (4) $\frac{2x+4}{5x}$

**Use this space for
computations.**

28 How many different four-letter arrangements are possible with the letters G, A, R, D, E, N if each letter may be used only once?

(1) 15

(3) 360

(2) 24

(4) 720

29 What is an equation of the line that passes through the points $(1,3)$ and $(8,5)$?

(1) $y + 1 = \frac{2}{7}(x + 3)$

(3) $y - 1 = \frac{2}{7}(x + 3)$

(2) $y - 5 = \frac{2}{7}(x - 8)$

(4) $y + 5 = \frac{2}{7}(x - 8)$

30 An example of an algebraic expression is

(1) $x + 2$

(3) $y < x + 2$

(2) $y = x + 2$

(4) $y = x^2 + 2x$

Part II

Answer all 3 questions in this part. Each correct answer will receive 2 credits. Clearly indicate the necessary steps, including appropriate formula substitutions, diagrams, graphs, charts, etc. For all questions in this part, a correct numerical answer with no work shown will receive only 1 credit. [6]

31 Express in simplest form: $\frac{45a^4b^3 - 90a^3b}{15a^2b}$

32 Joseph typed a 1,200-word essay in 25 minutes. At this rate, determine how many words he can type in 45 minutes.

33 Express $-3\sqrt{48}$ in simplest radical form.

Part III

Answer all 3 questions in this part. Each correct answer will receive 3 credits. Clearly indicate the necessary steps, including appropriate formula substitutions, diagrams, graphs, charts, etc. For all questions in this part, a correct numerical answer with no work shown will receive only 1 credit. [9]

34 The number of songs fifteen students have on their MP3 players is:

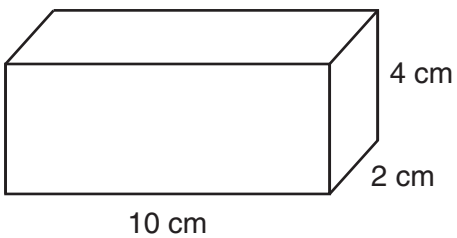
120, 124, 132, 145, 200, 255, 260, 292, 308, 314, 342, 407, 421, 435, 452

State the values of the minimum, 1st quartile, median, 3rd quartile, and maximum.

Using these values, construct a box-and-whisker plot using an appropriate scale on the line below.



35 Find the volume, in cubic centimeters, *and* the surface area, in square centimeters, of the rectangular prism shown below.



36 Find the roots of the equation $x^2 = 30 - 13x$ algebraically.

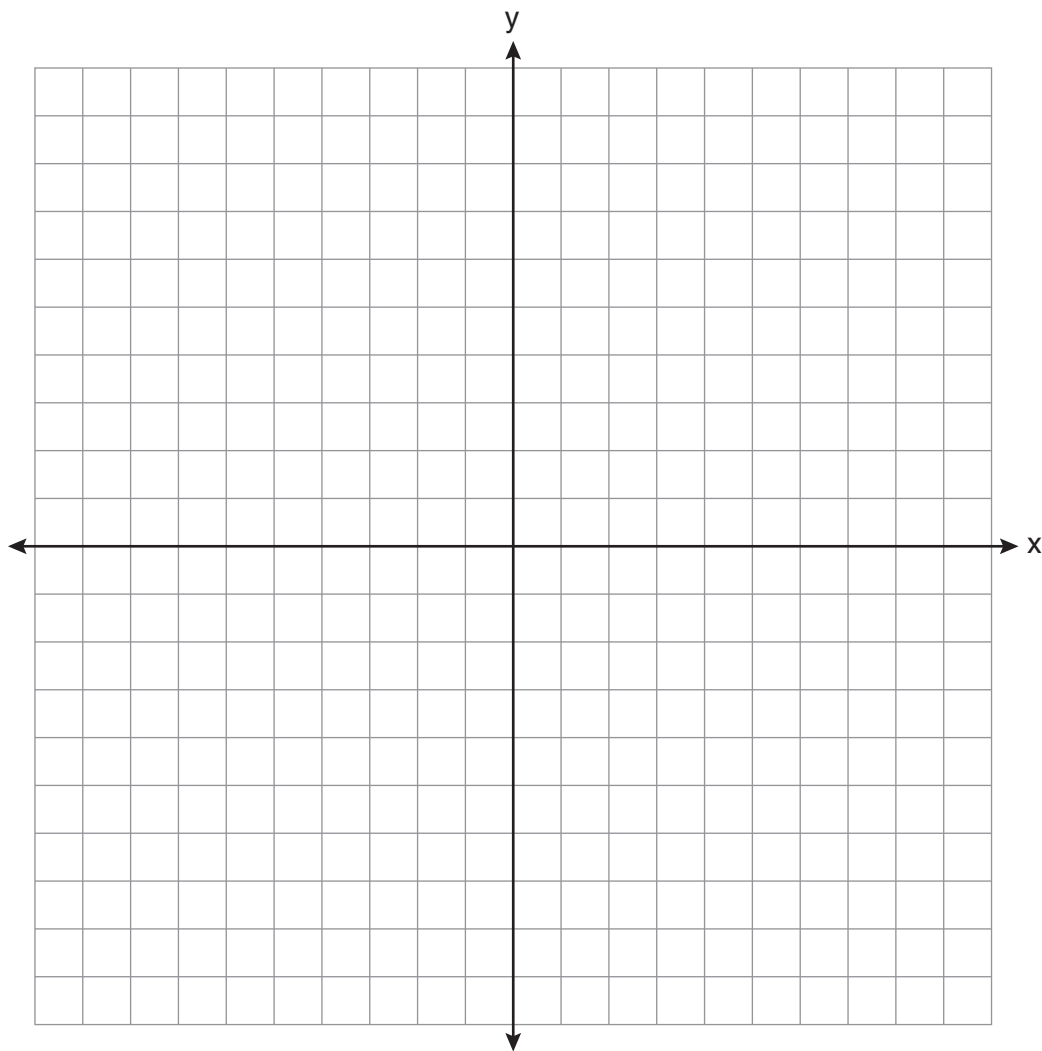
Part IV

Answer all 3 questions in this part. Each correct answer will receive 4 credits. Clearly indicate the necessary steps, including appropriate formula substitutions, diagrams, graphs, charts, etc. For all questions in this part, a correct numerical answer with no work shown will receive only 1 credit. [12]

37 On the set of axes below, solve the following system of inequalities graphically.

$$y < 2x + 1$$
$$y \geq -\frac{1}{3}x + 4$$

State the coordinates of a point in the solution set.



- 38** Each of the hats shown below has colored marbles placed inside. Hat A contains five green marbles and four red marbles. Hat B contains six blue marbles and five red marbles. Hat C contains five green marbles and five blue marbles.



Hat A



Hat B

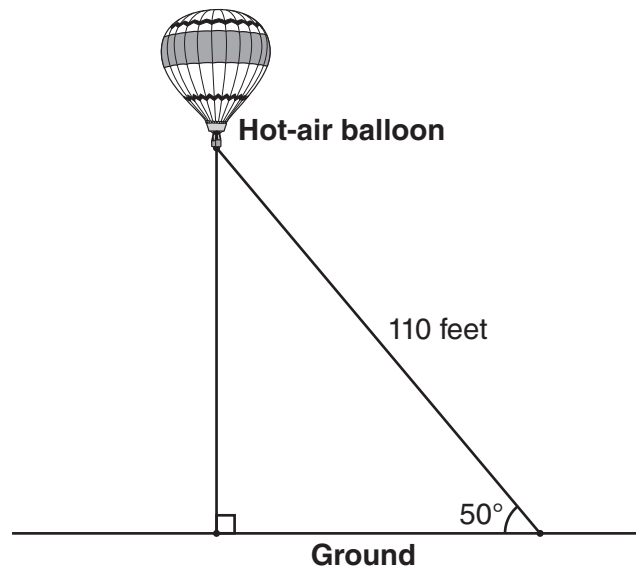


Hat C

If a student were to randomly pick one marble from each of these three hats, determine from which hat the student would most likely pick a green marble. Justify your answer.

Determine the fewest number of marbles, if any, and the color of these marbles that could be added to *each* hat so that the probability of picking a green marble will be one-half in each of the three hats.

- 39** A hot-air balloon is tied to the ground with two taut (straight) ropes, as shown in the diagram below. One rope is directly under the balloon and makes a right angle with the ground. The other rope forms an angle of 50° with the ground.



Determine the height, to the *nearest foot*, of the balloon directly above the ground.

Determine the distance, to the *nearest foot*, on the ground between the two ropes.

Reference Sheet

Trigonometric Ratios

$$\sin A = \frac{\textit{opposite}}{\textit{hypotenuse}}$$

$$\cos A = \frac{\textit{adjacent}}{\textit{hypotenuse}}$$

$$\tan A = \frac{\textit{opposite}}{\textit{adjacent}}$$

Area

trapezoid $A = \frac{1}{2}h(b_1 + b_2)$

Volume

cylinder $V = \pi r^2 h$

Surface Area

rectangular prism $SA = 2lw + 2hw + 2lh$

cylinder $SA = 2\pi r^2 + 2\pi rh$

Coordinate Geometry

$$m = \frac{\Delta y}{\Delta x} = \frac{y_2 - y_1}{x_2 - x_1}$$

Tear Here

Tear Here


Tear Here

Tear Here


Scrap Graph Paper — This sheet will *not* be scored.

Tear Here

Tear Here



Scrap Graph Paper — This sheet will *not* be scored.



Tear Here

Tear Here

The University of the State of New York
REGENTS HIGH SCHOOL EXAMINATION

INTEGRATED ALGEBRA

Wednesday, August 18, 2010—8:30 to 11:30 a.m., only

ANSWER SHEET

Student Sex: Male Female Grade

Teacher School

Your answers to Part I should be recorded on this answer sheet.

Part I

Answer all 30 questions in this part.

- | | | | |
|---------|----------|----------|----------|
| 1 | 9 | 17 | 25 |
| 2 | 10 | 18 | 26 |
| 3 | 11 | 19 | 27 |
| 4 | 12 | 20 | 28 |
| 5 | 13 | 21 | 29 |
| 6 | 14 | 22 | 30 |
| 7 | 15 | 23 | |
| 8 | 16 | 24 | |

Your answers for Parts II, III, and IV should be written in the test booklet.

The declaration below must be signed when you have completed the examination.

I do hereby affirm, at the close of this examination, that I had no unlawful knowledge of the questions or answers prior to the examination and that I have neither given nor received assistance in answering any of the questions during the examination.

Signature

