

PHYSICAL SETTING EARTH SCIENCE

Friday, January 27, 2023 — 9:15 a.m. to 12:15 p.m., only

ANSWER BOOKLET

Student

Teacher

School Grade

Record your answers for Part B–2 and Part C in this booklet.

Part B–2

51 _____

52 _____ **Period**

53 Mineral name: _____

Mineral use: _____

54 _____

55 Date: _____

56 _____

57 _____

58 Terrestrial planet: _____

Jovian planet: _____

59 _____

60 _____ million km

61 _____ times greater

62 _____

63 Subducting plate: _____

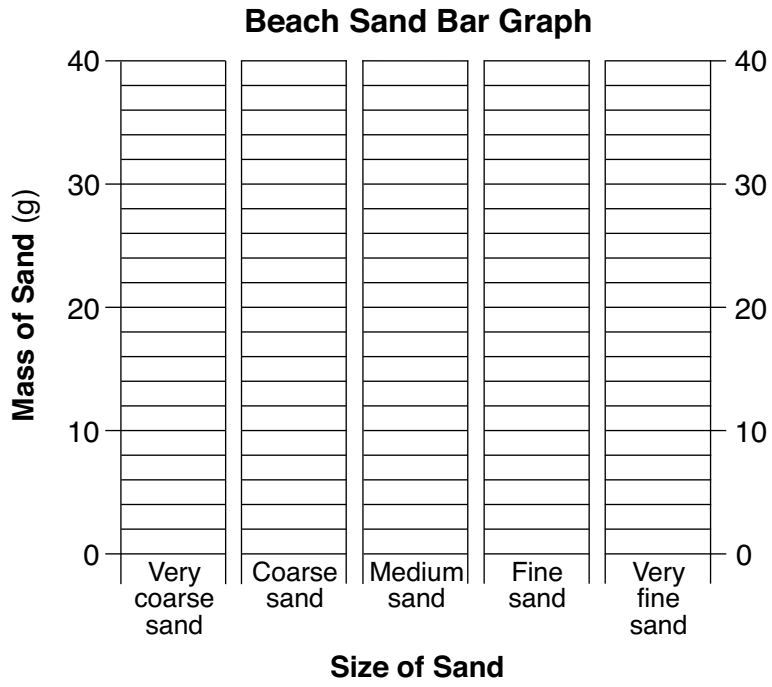
Overriding plate: _____

64 _____ Ridge

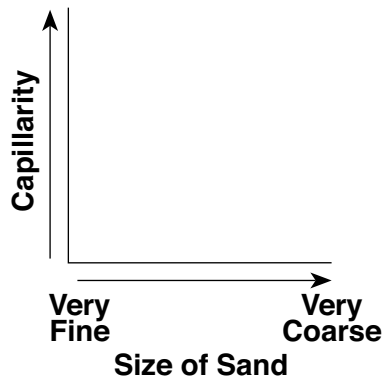
65 _____

Part C

66

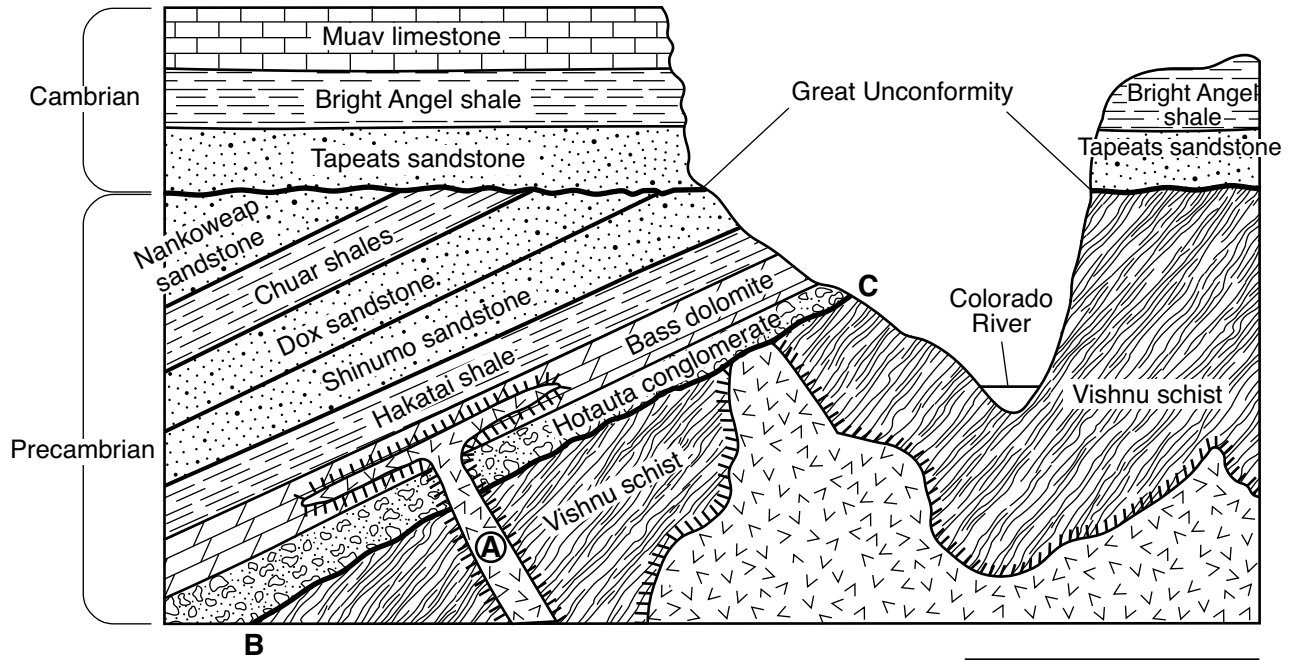


67



68 _____ cm/s

69



Key	
	Igneous rock
	Contact metamorphism

70 Process 1: _____

Process 2: _____

71 _____

72 _____

73 _____

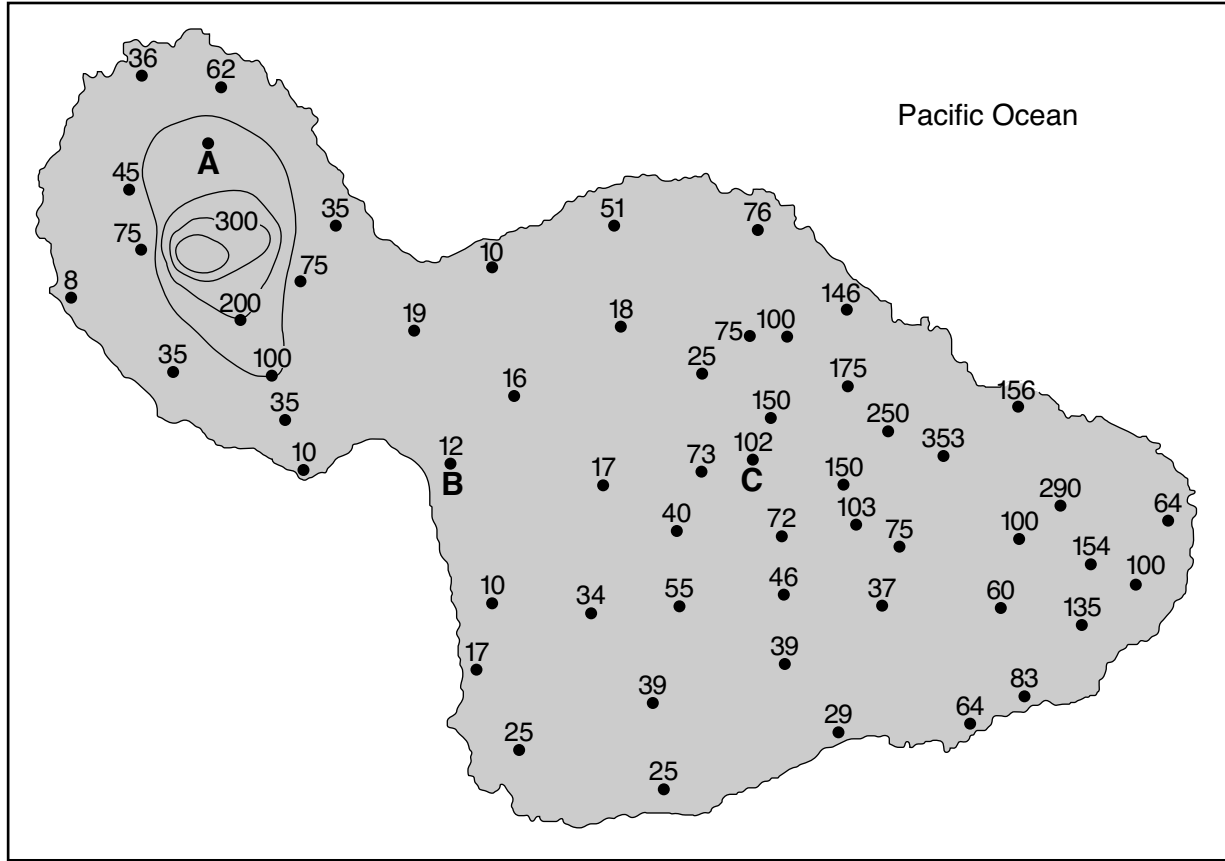
74 _____ **front**

75 _____

76 _____

77 _____

Average Yearly Rainfall Map for Maui



0 15 30 45 60 75 90 km

Isoline Interval 100 cm

79 _____ cm

80 _____ cm/km

81 _____

82 _____ d

83 _____

84 _____

85 Relative summer temperatures: _____

Relative winter temperatures: _____

