

The University of the State of New York  
REGENTS HIGH SCHOOL EXAMINATION

# ALGEBRA 2/ TRIGONOMETRY

Friday, June 14, 2013 — 1:15 – 4:15 p.m.

## SAMPLE RESPONSE SET

### Table of Contents

Practice Papers—Question 28 . . . . .	2
Practice Papers—Question 29 . . . . .	6
Practice Papers—Question 30 . . . . .	10
Practice Papers—Question 31 . . . . .	15
Practice Papers—Question 32 . . . . .	18
Practice Papers—Question 33 . . . . .	21
Practice Papers—Question 34 . . . . .	26
Practice Papers—Question 35 . . . . .	30
Practice Papers—Question 36 . . . . .	33
Practice Papers—Question 37 . . . . .	41
Practice Papers—Question 38 . . . . .	46
Practice Papers—Question 39 . . . . .	51

Practice Papers—Question 28

28 Determine the sum and the product of the roots of the equation  $12x^2 + x - 6 = 0$ .

$$\frac{12x^2 + x - 6}{12} = 0$$

$$x^2 + \frac{x}{12} - \frac{1}{2} = 0$$

$$\begin{array}{l} \text{sum} = -\frac{1}{12} \\ \text{product} = -\frac{1}{2} \end{array}$$

Score 2: The student has a complete and correct response.

Practice Papers—Question 28

28 Determine the sum and the product of the roots of the equation  $12x^2 + x - 6 = 0$ .

$$12x^2 + x - 6$$

$$x = \frac{-b \pm \sqrt{b^2 - 4ac}}{2a}$$

$$\frac{-1 \pm \sqrt{1^2 - 4(12)(-6)}}{24}$$

$$\frac{-1 \pm 17}{24} \quad S = \frac{16}{24} + \frac{-19}{24}$$

$$S = \frac{-2}{24} = \boxed{\frac{-1}{12}}$$

$$P = \frac{16}{24} \cdot \frac{-19}{24}$$

$$P = \frac{-288}{576} = \boxed{\frac{-1}{2}}$$

Score 1: The student made a computational error by omitting a negative sign.

Practice Papers—Question 28

28 Determine the sum and the product of the roots of the equation  $12x^2 + x - 6 = 0$ .

$$12x^2 + x - 6 = 0$$
$$\frac{-(-6)}{2(12)} \quad \boxed{\frac{-1}{24} = \text{sum}}$$
$$\frac{-6}{12} \quad \boxed{-0.5 = \text{product}}$$

Score 1: The student made a conceptual error by using the expression  $-\frac{b}{2a}$  to find the sum of the roots.

Practice Papers—Question 28

28 Determine the sum and the product of the roots of the equation  $12x^2 + x - 6 = 0$ .

$$r = \frac{-b}{a} \quad r = \frac{-c}{12} = +\frac{1}{2}$$

$$r = \frac{a}{c} \quad r = \frac{12}{-6} = \frac{2}{-1} = -2$$

$$\text{Sum of roots} = \boxed{\frac{1}{2}}$$

$$\text{Product of roots} = \boxed{-2}$$

Score 0: The student made multiple errors. For the sum of the roots, the student used  $c$  rather than  $b$  in the formula and for the product of the roots, the student used an incorrect formula.

Practice Papers—Question 29

29 Solve algebraically for  $x$ :

$$\log_{27}(2x - 1) = \frac{4}{3}$$

$$27^{4/3} = 2x - 1$$

$$81 = 2x - 1$$

$$\frac{82}{2} = \frac{2x}{2}$$

$$41 = x$$

Score 2: The student has a complete and correct response.

Practice Papers—Question 29

29 Solve algebraically for  $x$ :

$$\log_{27}(2x - 1) = \frac{4}{3}$$

$$x = 41$$

81

27

81

80.9

$$\begin{array}{r} 81 = 2x - 1 \\ + 1 \quad \quad \quad + 1 \\ \hline \end{array}$$

$$\frac{82}{2} = \frac{2x}{2}$$

Score 2: The student computed  $27^{\frac{4}{3}} = 81$  (without showing that calculation), but completed the solution appropriately.

Practice Papers—Question 29

29 Solve algebraically for  $x$ :

$$\log_{27} (2x - 1) = \frac{4}{3}$$

$$\log_{27} (2x-1) = \frac{4}{3}$$

$$(2x-1)^{\frac{4}{3}} = 27$$

$$\left( \sqrt[3]{2x-1} \right)^4 = (27)^3$$

$$\sqrt[4]{2x-1} = \sqrt[4]{19683}$$

$$2x-1 = 11.8446612$$

$$2x = 12.8446612$$

$$x = 6.42233058$$

Score 1: The student made a conceptual error in rewriting the log equation as an exponential equation, but solved the resulting equation appropriately.



Practice Papers—Question 29

29 Solve algebraically for  $x$ :

$$\log_{27}(2x - 1) = \frac{4}{3}$$

$$\frac{\log(2x-1)}{\log(27)} = \frac{4}{3}$$
$$\frac{2x-1}{27} = \frac{4}{3}$$

$$6x - 3 = 108$$

$$\frac{6x}{6} = \frac{111}{6}$$

$$x = 1.83$$

$$x = 1.83$$

Score 0: The student began with the change of base formula for the logarithm. The student then made a conceptual error by “dividing out” the “log” and made a computational error in solving for  $x$ .

Practice Papers—Question 30

30 Find the number of possible different 10-letter arrangements using the letters of the word "STATISTICS."

3 "s"

3 "t"

2 "i"

1 "a"

1 "c"

$$\frac{10!}{3! 3! 2!} = 50400$$

50400 ways

Score 2: The student has a complete and correct response.

Practice Papers—Question 30

30 Find the number of possible different 10-letter arrangements using the letters of the word "STATISTICS."

$$\frac{10!}{3! \cdot 3! \cdot 2!} = \frac{3628800}{72} = 50,400 \text{ ways}$$

Score 2: The student has a complete and correct response.

Practice Papers—Question 30

30 Find the number of possible different 10-letter arrangements using the letters of the word “STATISTICS.”

$$\frac{10!}{3!3!2!} = \boxed{7257600}$$

Score 1: The student wrote the correct expression, but made a calculator entry error by computing  $\frac{10!}{3!3!2!}$ , excluding the parentheses around the denominator.

Practice Papers—Question 30

30 Find the number of possible different 10-letter arrangements using the letters of the word "STATISTICS."

$$\frac{10!}{3!3!} = 3628800$$

$$\frac{10 \cdot 9 \cdot 8 \cdot 7 \cdot 6 \cdot 5 \cdot 4 \cdot 3 \cdot 2 \cdot 1}{3 \cdot 2 \cdot 1 \cdot 3 \cdot 2 \cdot 1} = \frac{3628800}{36}$$

100800

Score 1: The student made a conceptual error by omitting 2! in the denominator.

Practice Papers—Question 30

30 Find the number of possible different 10-letter arrangements using the letters of the word “STATISTICS.”

$$\text{Statistics}$$
$$\underline{10} \cdot \underline{9} \cdot \underline{8} \cdot \underline{7} \cdot \underline{6} \cdot \underline{5} \cdot \underline{4} \cdot \underline{3} \cdot \underline{2} \cdot \underline{1} =$$

$$3628800$$

Score 0: The student response is equivalent to  $10!$ .

Practice Papers—Question 31


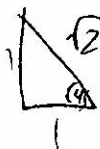
31 Express the product of  $\cos 30^\circ$  and  $\sin 45^\circ$  in simplest radical form.

$$\cos 30 = \frac{\sqrt{3}}{2}$$

$$\sin 45 = \frac{1}{\sqrt{2}}$$

$$\frac{\sqrt{3}}{2\sqrt{2}} \cdot \frac{\sqrt{2}}{\sqrt{2}}$$

$$\frac{\sqrt{6}}{4}$$



Score 2: The student has a complete and correct response.

---

**Practice Papers—Question 31**

---

31 Express the product of  $\cos 30^\circ$  and  $\sin 45^\circ$  in simplest radical form.

$$\begin{aligned}\cos 30 &= \frac{\sqrt{3}}{2} \\ \sin 45 &= \frac{\sqrt{2}}{2} \\ & \left(\frac{\sqrt{3}}{2}\right)\left(\frac{\sqrt{2}}{2}\right)\end{aligned}$$

---

Score 1: The student did not complete the multiplication.



---

**Practice Papers—Question 31**

---

31 Express the product of  $\cos 30^\circ$  and  $\sin 45^\circ$  in simplest radical form.

$$\cos 30 \cdot \sin 45 = .61223724357$$

Score 0: The student failed to express both trigonometric expressions in radical form and only showed the answer as a decimal.

Practice Papers—Question 32

32 Find, algebraically, the measure of the obtuse angle, to the *nearest degree*, that satisfies the equation  $5 \csc \theta = 8$ .

$$\csc \theta = \frac{8}{5}$$



$$\sin \theta = \frac{5}{8}$$

$$\sin^{-1}\left(\frac{5}{8}\right) = 39^\circ$$



$$180^\circ - 39^\circ = \boxed{141^\circ}$$

Score 2: The student has a complete and correct response.

Practice Papers—Question 32

32 Find, algebraically, the measure of the obtuse angle, to the *nearest degree*, that satisfies the equation  $5 \csc \theta = 8$ .

$$\frac{5 \csc \theta}{5} = \frac{8}{5}$$

$$\csc \theta = \frac{8}{5}$$

$$\sin \theta = \frac{5}{8}$$

$$= 38.68218745$$

$$+ 90$$

$$\hline 128.6821875$$

$$\text{Answer} = 129^\circ$$

Score 1: The student found the correct reference angle, but made a conceptual error in finding the obtuse angle by adding  $90^\circ$  to the reference angle rather than subtracting it from  $180^\circ$ .

Practice Papers—Question 32

32 Find, algebraically, the measure of the obtuse angle, to the *nearest degree*, that satisfies the equation  $5 \csc \theta = 8$ .

$$\frac{5 \csc \theta}{5} = \frac{8}{5}$$

$$\csc \theta = \frac{8}{5}$$

$$\frac{1}{\sin(\frac{\theta}{5})} = 91.6750653$$

$$\boxed{92^\circ}$$

Score 0: The student demonstrated a lack of understanding of the reciprocal function.

Practice Papers—Question 33

33 If  $g(x) = (ax\sqrt{1-x})^2$ , express  $g(10)$  in simplest form.

$$\begin{aligned}g(x) &= (10a\sqrt{1-10})^2 \\ &= (10a\sqrt{-9}) (10a\sqrt{-9}) \\ &= 100a^2 \cdot 9 \\ &= 900a^2\end{aligned}$$

Score 2: The student has a complete and correct response.

Practice Papers—Question 33

33 If  $g(x) = (ax\sqrt{1-x})^2$ , express  $g(10)$  in simplest form.

$$\begin{aligned}
 g(10) &= (a \cdot 10 \cdot \sqrt{1-10})^2 \\
 g(10) &= (10a \cdot \sqrt{-9})^2 \\
 g(10) &= (10a \cdot 3i)^2 \\
 g(10) &= (10a^2 \cdot 3i)^2 \\
 g(10) &= (100a^2 \cdot -9) \\
 g(10) &= (-900a^2)
 \end{aligned}$$



Score 2: The student has a complete and correct response.

Practice Papers—Question 33

33 If  $g(x) = (ax\sqrt{1-x})^2$ , express  $g(10)$  in simplest form.

$$\begin{aligned}g(10) &= (a10\sqrt{1-10})^2 \\g(10) &= (a10 \cdot 3)^2 \\g(10) &= (30a)^2 \\g(10) &= 900a^2\end{aligned}$$

Score 1: The student made a conceptual error in simplifying  $\sqrt{1-10}$ .

Practice Papers—Question 33

33 If  $g(x) = (ax\sqrt{1-x})^2$ , express  $g(10)$  in simplest form.

$$X = (10 \sqrt{1-10})^2$$
$$\begin{array}{c} \textcircled{-9} \\ \wedge \\ 3 \end{array} \quad \begin{array}{c} 2 \\ \phantom{\wedge} \end{array}$$
$$(30i)^2$$
$$X = 900i$$

Score 0: The student dropped the  $a$  from the problem and made a computational error when squaring  $30i$ .



Practice Papers—Question 33

33 If  $g(x) = (ax\sqrt{1-x})^2$ , express  $g(10)$  in simplest form.

$$g(10) = (a(10)\sqrt{1-10})^2$$

$$g(10) = (10a\sqrt{-9})^2$$

$$g(10) = (10a \cdot 3i)^2$$

$$g(10) = 100a - 9$$

Score 0: The student made two distinct errors on the last step. The student failed to square the  $a$  and failed to multiply by  $-9$ .

Practice Papers—Question 34

34 Express  $\frac{\cot x \sin x}{\sec x}$  as a single trigonometric function, in simplest form, for all values of  $x$  for which it is defined.

$$\frac{\cot x \sin x}{\sec x} = \cos^2 x$$

$$\frac{\frac{\cos x}{\sin x} \cdot \frac{\sin x}{1}}{\frac{1}{\cos x}}$$

$$\frac{\cos x}{1} = \frac{\cos x}{1}$$
$$\cos^2 x$$

Score 2: The student has a complete and correct response.

Practice Papers—Question 34

34 Express  $\frac{\cot x \sin x}{\sec x}$  as a single trigonometric function, in simplest form, for all values of  $x$  for which it is defined.

$$\cot x = \frac{1}{\tan x} \quad \text{OR} \quad \frac{\cos x}{\cancel{\sin x}} \cdot \frac{\cancel{\sin x}}{1}$$

$$\sec x = \frac{1}{\cos x}$$

$$\frac{\cancel{\cos x}}{1} \cdot \frac{1}{\cancel{\cos x}} = \boxed{1}$$

Score 1: The student simplified the numerator correctly, but made a conceptual error by multiplying by  $\frac{1}{\cos x}$ .

Practice Papers—Question 34

34 Express  $\frac{\cot x \sin x}{\sec x}$  as a single trigonometric function, in simplest form, for all values of  $x$  for which it is defined.

$$\frac{\frac{1}{\tan(x)} \cdot \frac{\sin(x)}{1}}{\frac{\sin(x)}{\tan(x)} \cdot \frac{\cos(x)}{1}}$$

Score 0: The student made two simplification errors. The numerator of the expression  $\frac{\sin x}{\tan x}$  was not simplified and the final product was not simplified.

Practice Papers—Question 34

34 Express  $\frac{\cot x \sin x}{\sec x}$  as a single trigonometric function, in simplest form, for all values of  $x$  for which it is defined.

$$\frac{\frac{\cancel{\sin} x}{\cos} \times \cancel{\sin} x}{\frac{1}{\cos x}}$$

$$\frac{\cos x}{\cos x} = x$$

Score 0: The student made an incorrect substitution for  $\cot x$  and made a conceptual error simplifying the expression.

Practice Papers—Question 35

35 On a multiple-choice test, Abby randomly guesses on all seven questions. Each question has four choices. Find the probability, to the *nearest thousandth*, that Abby gets *exactly* three questions correct.

$$n = 7$$

$$r = 3$$

$$p = 1/4$$

$$q = 3/4$$

$$\frac{35}{7} \binom{7}{3} \left(\frac{1}{4}\right)^3 \left(\frac{3}{4}\right)^4$$

$$.173034668$$

$$\boxed{.173}$$

$$\frac{2835}{16384}$$

Score 2: The student has a complete and correct response.

Practice Papers—Question 35

35 On a multiple-choice test, Abby randomly guesses on all seven questions. Each question has four choices. Find the probability, to the *nearest thousandth*, that Abby gets *exactly* three questions correct.

$$n = 7$$

$$r = 3$$

$$p = 3/7$$

$$q = 4/7$$

$${}^7C_3 (3/7)^3 (4/7)^4$$
$$= 293755153$$
$$= 0.294$$

Score 1: The student made a conceptual error in finding the probability of success on a single trial, but then found an appropriate probability.

Practice Papers—Question 35

35 On a multiple-choice test, Abby randomly guesses on all seven questions. Each question has four choices. Find the probability, to the *nearest thousandth*, that Abby gets *exactly* three questions correct.

$$n = 7$$

$$r = 3$$

$$p = \frac{12}{28}$$

$$q = \frac{16}{28}$$

$${}^7C_3 \left(\frac{12}{28}\right)^{7-3} \left(\frac{16}{28}\right)^3$$

$$= .220$$

Score 0: The student made a conceptual error in finding the value of  $p$  and made a second conceptual error by reversing the exponents.



Practice Papers—Question 36

36 Solve the equation below algebraically, and express the result in simplest radical form:

$$\frac{13}{x} = 10 - x$$

$$\begin{aligned}
 & -x^2 + 10x - 13 = 0 \\
 & x^2 - 10x + 13 = 0 \\
 & \frac{10 \pm \sqrt{100 - 4(1)(13)}}{2(1)} \\
 & \frac{10 \pm \sqrt{100 - 52}}{2} \\
 & \frac{10 \pm \sqrt{48}}{2} \\
 & \frac{10 \pm \sqrt{16 \cdot 3}}{2} \\
 & \frac{5(2) \pm \frac{2}{2}\sqrt{3}}{2} \\
 & 5 \pm \sqrt{3}
 \end{aligned}$$

Score 4: The student has a complete and correct response.

Practice Papers—Question 36

36 Solve the equation below algebraically, and express the result in simplest radical form:

$$\frac{13}{x} = 10 - x$$

$$13 = 10x - x^2$$

$$-x^2 + 10x = 13$$

~~$$x^2 + 10x + 25 = 38$$~~

$$x^2 - 10x = -13$$

$$x^2 - 10x + 25 = 12$$

$$(x - 5)(x - 5) = 12$$

$$(x - 5)^2 = 12$$

$$x - 5 = \pm \sqrt{12}$$

$$x = \pm \sqrt{12} + 5$$

Score 3: The student did not simplify  $\sqrt{12}$ .

Practice Papers—Question 36

36 Solve the equation below algebraically, and express the result in simplest radical form:

$$\frac{13}{x} = 10 - x$$

$$\frac{13}{x} = \frac{10-x}{1} \left(\frac{x}{x}\right)$$

~~$$\frac{13}{x} = 10 - x^2$$~~

~~$$\frac{13}{x} = \frac{10-x}{1}$$~~

$$\frac{10 \pm \sqrt{48}}{2}$$

~~$$\frac{5 \pm \sqrt{48}}{2}$$~~

$$\frac{10 \pm \sqrt{48}}{2}$$

$$13 = 10x - x^2 - 13$$

$$-x^2 + 10x - 13$$

$$x^2 - 10x + 13$$

$$\begin{aligned} a &= 1 \\ b &= -10 \\ c &= 13 \end{aligned}$$

$$\frac{-b \pm \sqrt{(b)^2 - 4ac}}{2a}$$

$$\frac{10 \pm \sqrt{(-10)^2 - 4(1)(13)}}{2(1)}$$

$$\frac{10 \pm \sqrt{48}}{2}$$

Score 3: The student wrote and solved a correct quadratic equation, but the radical was not simplified.

---

**Practice Papers—Question 36**

---

36 Solve the equation below algebraically, and express the result in simplest radical form:

$$\frac{13}{x} = 10 - x$$

$$13 = 10 - x^2$$

$$x^2 = -3$$

$$x = \pm \sqrt{-3}$$

$$x = \pm i\sqrt{3}$$

Score 2: The student made a conceptual error when simplifying the proportion.

Practice Papers—Question 36

36 Solve the equation below algebraically, and express the result in simplest radical form:

$$\frac{13}{x} = 10 - x$$

$$\begin{aligned}13 &= 10x - x^2 \\-13 &= -10x + x^2 \\x^2 - 10x + 25 &= -13 + 25 \\(x-5)^2 &= -12 \\\sqrt{(x-5)^2} &= \sqrt{-12} \\x-5 &= \pm \sqrt{-12} \\x &= 5 \pm \sqrt{-12}\end{aligned}$$

Score 2: The student made a computational error when adding  $-13$  and  $25$  and did not simplify the radical.

---

**Practice Papers—Question 36**

---

36 Solve the equation below algebraically, and express the result in simplest radical form:

$$\frac{13}{x} = 10 - x$$

$$13 = 10x - x^2$$
$$-10x - 10x$$

$$3x = x^2$$

$$0 = x^2 - 3x$$

$$0 = (x-3)x$$

$$x=3 \quad x=0$$

Score 1: The student made a conceptual error combining 13 and  $-10x$ . The student also dropped the negative sign in front of  $x^2$ , but an appropriate solution was found.

Practice Papers—Question 36

36 Solve the equation below algebraically, and express the result in simplest radical form:

$$\frac{13}{x} = 10 - x$$

$$\frac{13}{x} = \frac{10-x}{1}$$

$$10x - x^2 = 13$$
$$-13$$

$$10x - x^2 - 13$$

$$x^2 - 10x + 13$$

$$x = \frac{-b \pm \sqrt{b^2 - 4ac}}{2a}$$

$$\frac{10 \pm \sqrt{10 + 52}}{2}$$

$$\frac{\sqrt{10 \pm 52}}{2}$$

$$x = 5 \pm \sqrt{62}$$

Score 0: The student made two computational errors (did not square 10 and added 52) and one conceptual error (did not divide the entire numerator by 2).

Practice Papers—Question 36

36 Solve the equation below algebraically, and express the result in simplest radical form:

$$\frac{13}{x} = 10 - x$$

$$\frac{13}{x} = \frac{10-x}{1}$$

$$10x - x^2 = 13$$

$$-x^2 + 10x - 13$$

$$-x^2 + 10x = 13$$

$$-x^2 + 10x + 25 = 13$$

$$(-x + 5)(-x + 5)$$

$$-x = -5 \quad -x = 5$$

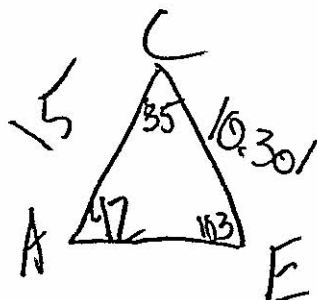
$$x = 5 \quad x = 5 \quad x = -13$$

Score 0: The student made two conceptual errors when attempting to complete the square and when solving the resulting equation.



Practice Papers—Question 37

37 A ranch in the Australian Outback is shaped like triangle  $ACE$ , with  $m\angle A = 42$ ,  $m\angle E = 103$ , and  $AC = 15$  miles. Find the area of the ranch, to the nearest square mile.



$$\frac{15}{\sin 103} = \frac{x}{\sin 42}$$

$$K = \frac{1}{2}abs \sin C$$

$$K = \frac{1}{2}(15)(10.301)(\sin 35)$$

$$K = \frac{1}{2}(154.515)(.5736)$$

$$K = 77.2575(.5736)$$

$$K = 44.3149$$

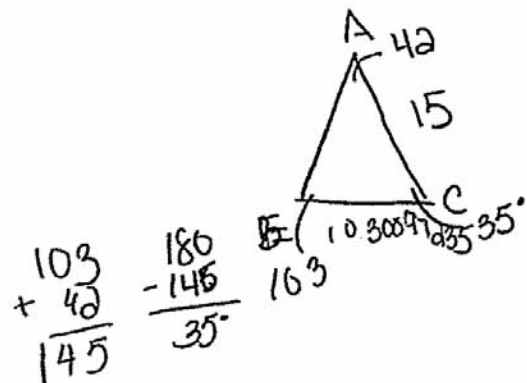
$$K = \textcircled{44}$$

$$x = 10.3000$$

Score 4: The student has a complete and correct response.

Practice Papers—Question 37

37 A ranch in the Australian Outback is shaped like triangle  $ACE$ , with  $m\angle A = 42$ ,  $m\angle E = 103$ , and  $AC = 15$  miles. Find the area of the ranch, to the nearest square mile.



$$\frac{a}{\sin A} = \frac{e}{\sin E}$$

$$\frac{a}{\sin 42} = \frac{15}{\sin 103}$$

$$\frac{a \sin 103}{\sin 103} = \frac{15 \sin 42}{\sin 103}$$

$$a = 10.30097235 \dots$$

$$A = \frac{1}{2} ab \sin C$$

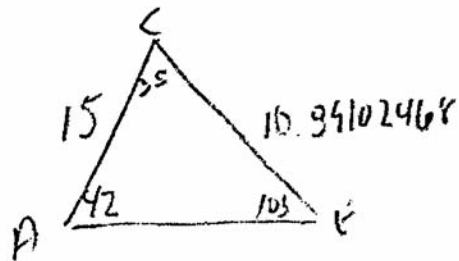
$$A = \frac{1}{2} (10.30097235)(15) \sin 35$$

$$A = 44 \text{ ft}^2$$

Score 3: The student labeled the answer with the wrong units.

Practice Papers—Question 37

37 A ranch in the Australian Outback is shaped like triangle  $ACE$ , with  $m\angle A = 42$ ,  $m\angle E = 103$ , and  $AC = 15$  miles. Find the area of the ranch, to the nearest square mile.



$$\frac{a}{\sin A} = \frac{c}{\sin C}$$

$$\frac{x}{\sin 42} = \frac{15}{\sin 103}$$

$$x(\sin 103) = 15(\sin 42)$$

$$x = 10.35102468$$

$$K = \frac{1}{2} ab \sin C$$

$$K = \frac{1}{2} (15)(10.35102468) \sin 35$$

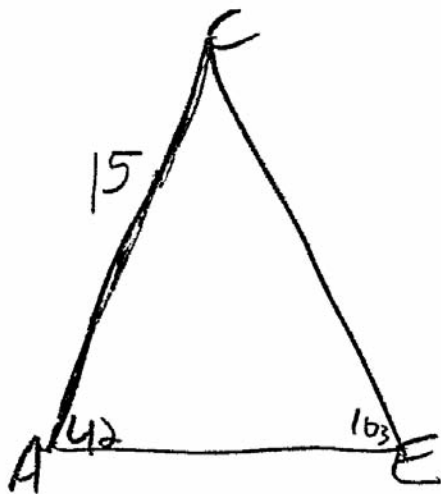
$$K = 77.9326851(\sin 35)$$

$$K = 44.70035179$$

Score 2: The student wrote the wrong measure for the obtuse angle and the student did not round the final answer to the nearest square mile.

Practice Papers—Question 37

- 37 A ranch in the Australian Outback is shaped like triangle  $ACE$ , with  $m\angle A = 42$ ,  $m\angle E = 103$ , and  $AC = 15$  miles. Find the area of the ranch, to the nearest square mile.



$$\frac{15}{\sin 103} = \frac{X}{\sin 42}$$

$$\frac{15 (\sin 42)}{\sin 103} = \frac{(\sin 103) X}{\sin 103}$$

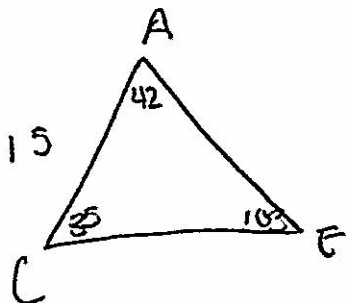
$$X = 10.30097235 \text{ mil.}$$

$$X \approx 10 \text{ miles}^2$$

Score 1: The student made a correct substitution into the Law of Sines, but made an error in labeling the length of  $\overline{CE}$  as miles<sup>2</sup>.

Practice Papers—Question 37

37 A ranch in the Australian Outback is shaped like triangle  $ACE$ , with  $m\angle A = 42$ ,  $m\angle E = 103$ , and  $AC = 15$  miles. Find the area of the ranch, to the nearest square mile.



$$K = \frac{1}{2} ab \sin C$$

$$K = \frac{1}{2} (42)(103) \sin(35)$$

$$1240.65 \text{ sq mi.}$$

$$\begin{array}{r} 42 \\ 103 \\ \hline 145 \end{array}$$

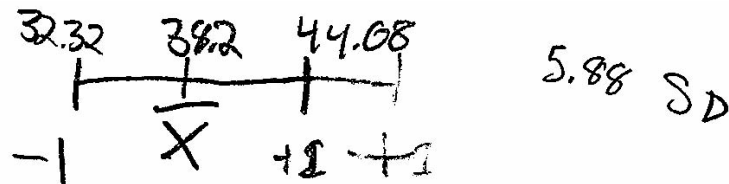
$$\begin{array}{r} 180 \\ -145 \\ \hline \end{array}$$

Score 0: The student incorrectly used the area of a triangle formula by substituting the measures of the angles for  $a$  and  $b$  instead of the lengths of the sides.

Practice Papers—Question 38

38 Ten teams competed in a cheerleading competition at a local high school. Their scores were 29, 28, 39, 37, 45, 40, 41, 38, 37, and 48.

How many scores are within one population standard deviation from the mean?



6 scores

For these data, what is the interquartile range?

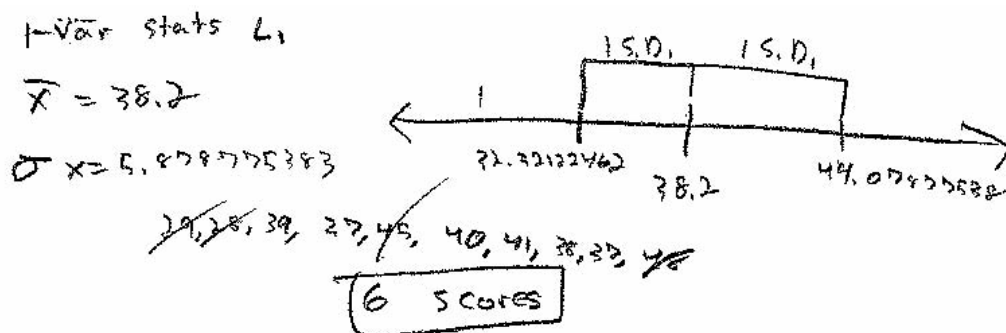
$$41 - 37 = 4$$
$$(Q_3) - (Q_1) = IQR$$

Score 4: The student has a complete and correct response.

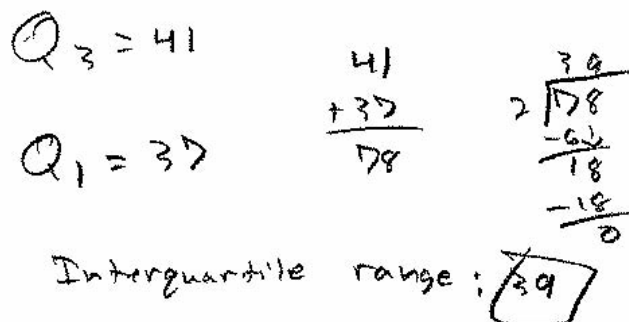
Practice Papers—Question 38

38 Ten teams competed in a cheerleading competition at a local high school. Their scores were 29, 28, 39, 37, 45, 40, 41, 38, 37, and 48.

How many scores are within one population standard deviation from the mean?



For these data, what is the interquartile range?



Score 3: The student found  $Q_1$  and  $Q_3$ , but instead of subtracting those values, they were averaged.

Practice Papers—Question 38

38 Ten teams competed in a cheerleading competition at a local high school. Their scores were 29, 28, 39, 37, 45, 40, 41, 38, 37, and 48.

How many scores are within one population standard deviation from the mean?

$$\begin{array}{r} \bar{x} = 38.2 \\ \sigma_x = 5.8788 \\ + 5.8788 \\ \hline 11.76 \end{array} \qquad \begin{array}{r} 15 \\ + 19.1 \\ \hline 34.1 + 34.1 = 68.2 \\ \textcircled{11} \end{array}$$

For these data, what is the interquartile range?

$$Q_1 = 37 \qquad Q_3 = 41$$

Score 2: The student correctly found the mean, population standard deviation,  $Q_1$ , and  $Q_3$ , but did not answer either part of the question.



---

**Practice Papers—Question 38**

---

**38** Ten teams competed in a cheerleading competition at a local high school. Their scores were 29, 28, 39, 37, 45, 40, 41, 38, 37, and 48.

How many scores are within one population standard deviation from the mean?

$$\bar{x} = 38.2$$

$$\sigma_x = 5.9$$

For these data, what is the interquartile range?

$$Q_3 - Q_1$$

---

Score 1: The student correctly found the mean and population standard deviation, but did not find the number of scores or interquartile range.

---

**Practice Papers—Question 38**

---

**38** Ten teams competed in a cheerleading competition at a local high school. Their scores were 29, 28, 39, 37, 45, 40, 41, 38, 37, and 48.

How many scores are within one population standard deviation from the mean?

6 scores

For these data, what is the interquartile range?

37-41

---

Score 0: The student did not show work for the first part of the question and did not find the interquartile range.

Practice Papers—Question 39

39 Solve algebraically for all values of  $x$ :

$$x^4 + 4x^3 + 4x^2 = -16x$$

$$\begin{aligned}x^4 + 4x^3 + 4x^2 + 16x &= 0 \\x(x^3 + 4x^2 + 4x + 16) &= 0 \\x(x^2(x+4) + 4(x+4)) & \\x(x^2 + 4)(x+4) &\end{aligned}$$

$$\begin{aligned}x=0 \quad x^2 &= -4 & x &= -4 \\x &= \sqrt{-4} \\x &= \pm 2i\end{aligned}$$

$$\begin{aligned}x &= 0 \\x &= 2i \\x &= -2i \\x &= -4\end{aligned}$$

Score 6: The student has a complete and correct response.

Practice Papers—Question 39

39 Solve algebraically for all values of  $x$ :

$$x^4 + 4x^3 + 4x^2 = -16x$$

$$x^4 + 4x^3 + 4x^2 + 16x = 0$$

$$(x^4 + 4x^3) + (4x^2 + 16x) = 0$$

$$x^3(x+4) + 4x(x+4) = 0$$

$$(x^3 + 4x)(x+4) = 0$$

$$x(x^2 - 4)(x+4) = 0$$

$$x = 0$$

$$x = -4$$

$$(x+2)(x-2)$$

$$x = -2 \quad x = 2$$

Score 5: The student factored  $x^3 + 4x$  incorrectly, but appropriate solutions were found.

Practice Papers—Question 39

39 Solve algebraically for all values of  $x$ :

$$x^4 + 4x^3 + 4x^2 = -16x$$

$$x^4 + 4x^3 + 4x^2 + 16x = 0$$

$$(x^4 + 4x^3) + (4x^2 + 16x) = 0$$

$$x^3(x+4) + 4x(x+4) = 0$$

$$(x^3 + 4x)(x+4) = 0$$

$$x^3 + 4x = 0 \quad \text{or} \quad x+4 = 0$$

$$x(x^2 + 4) = 0 \quad \quad \quad x = -4$$

$$x = 0 \quad \text{or} \quad x^2 + 4 = 0$$

$$x^2 = -4$$

no solution

$$\boxed{x = 0 \quad \text{or} \quad x = -4}$$

Score 4: The student found two correct solutions, but did not solve  $x^2 + 4 = 0$  correctly.

Practice Papers—Question 39

39 Solve algebraically for all values of  $x$ :

$$x^4 + 4x^3 + 4x^2 = -16x$$

$$+16x \quad +16x$$

$$(x^4 + 4x^3 + 4x^2 + 16x) = 0$$

$$x^3(x+4) + 4x(x+4) = 0$$

$$(x^3 + 4x)(x+4) = 0$$

$$\begin{array}{r} x^3 + 4x = 0 \\ -4x \quad -4x \\ \hline \end{array}$$

$$\begin{array}{r} x + 4 = 0 \\ -4 \quad -4 \\ \hline \end{array}$$

$$\begin{array}{r} \frac{x^3}{x} = \frac{-4x}{x} \\ \hline x^2 = -4 \\ \sqrt{\phantom{x}} \end{array}$$

$x =$   
reject

$$x = -4$$

Score 3: The student found  $(x^3 + 4x)(x + 4) = 0$ . The student did not find two solutions.

Practice Papers—Question 39

39 Solve algebraically for all values of  $x$ :

$$x^4 + 4x^3 + 4x^2 = -16x$$

$$x^4 + 4x^3 + 4x^2 + 16x = 0$$

$$x^3(x+4) + 4x(x+4)$$

$$(x^3 + 4x)(x+4) = 0$$

Score 3: The student found  $(x^3 + 4x)(x + 4) = 0$ , but no further work was shown.

Practice Papers—Question 39

39 Solve algebraically for all values of  $x$ :

$$x^4 + 4x^3 + 4x^2 = -16x$$

$$\frac{x^4 + 4x^3 + 4x^2 + 16x = 0}{x}$$

$$x(x^3 + 4x^2 + 4x + 16) = 0$$

$$x[x^2(x+4) + 4(x+4)] = 0$$

Score 2: The student factored out a greatest common factor of  $x$  correctly. The student grouped correctly and factored out a greatest common factor from each binomial.



---

**Practice Papers—Question 39**

---

39 Solve algebraically for all values of  $x$ :

$$x^4 + 4x^3 + 4x^2 = -16x$$

$$x^4 + 4x^3 + 4x^2 + 16x = 0$$

$$x(x^3 + 4x^2 + 4x + 16) = 0$$

Score 1: The student factored out the common factor of  $x$ , but did not do any other work.

Practice Papers—Question 39

39 Solve algebraically for all values of  $x$ :

$$x^4 + 4x^3 + 4x^2 = -16x$$

$+16x$        $-16x$

---

$$x^4 + 4x^3 + 4x^2 + 16x = 0$$

Score 0: The student set the equation equal to zero, but no further work is shown.

Practice Papers—Question 39

39 Solve algebraically for all values of  $x$ :

$$x^4 + 4x^3 + 4x^2 = -16x$$

$$x^4 + 4x^3 + 4x^2 + 16x = 0$$

$$x^2(x^2 + 4x + 4 + 16) = 0$$

$$x^2(x^2 + 4x + 20) = 0$$

~~$$x^2(x^2 + 4x + 20) = 0$$~~

$$x = \frac{-4 \pm \sqrt{(4)^2 - 4(1)(20)}}{2}$$

$$\frac{-4 \pm \sqrt{16 - 80}}{2}$$

$$\frac{-4 \pm \sqrt{-64}}{2}$$

$$\frac{-4 \pm 8}{2}$$

$$x = \frac{-4 + 8}{2}$$

$$x = 2$$

$$x = \frac{-4 - 8}{2}$$

$$x = -6$$

Score 0: The student set the equation equal to zero, but made a conceptual error in factoring out a common factor. The student made a second conceptual error in solving  $x^2 + 4x + 20 = 0$ .