



Haitian Creole Edition
Grade 4 Mathematics Test, Book 3
March 2–6, 2009

Pwogram Egzamen Eta Nouyòk
Egzamen Matematik
Liv 3

Ane **4**

2–6 mas 2009

Non _____



Developed and published under contract with the New York State Education Department by CTB/McGraw-Hill LLC, a subsidiary of The McGraw-Hill Companies, Inc., 20 Ryan Ranch Road, Monterey, California 93940-5703. Copyright © 2009 by the New York State Education Department. Permission is hereby granted for school administrators and educators to reproduce these materials, located online at <http://www.emsc.nysed.gov/osa>, in the quantities necessary for their school's use, but not for sale, provided copyright notices are retained as they appear in these publications. This permission does not apply to distribution of these materials, electronically or by other means, other than for school use.

TRIK POU FÈ EGZAMEN AN

Men kèk sijasyon pou ede ou bay pi bon rannman:

- Asire ou li avèk atansyon tout enstriksyon ki nan tiliv egzamen an.
- Li chak kesyon avèk atansyon epi reflechi sou repons lan anvan ou ekri repons ou.
- Asire ou montre travay ou lè yo mande ou pou fè sa. Ou ka resevwa yon pati nan kredi a si ou montre travay ou.



Pòtre sa a vle di ou pral sèvi avèk règ ou.

40

Ane pase 4.390 moun te rete nan Sea View Hotel e 2.054 moun te rete nan Hilltop Hotel. Konbyen moun **anplis** ki rete nan Sea View Hotel pase nan Hilltop Hotel?

Montre travay ou.

Repons _____ moun

Kontinye

41

Earl achte yon plim nan magazen an. Li bay kesye a yon biyè \$5 e li resevwa pyès yo montre pi ba a kòm monnen.



Peni



Peni



Peni



Dis santim



Senk santim



Senk santim

Konbyen kòb plim nan te koute?

Montre travay ou.

Repons \$ _____

42

Yon vestyè ki bò kote yon jimnazyòm gen 8 ranje kazye ki gen 26 kazye nan chak ranje. Ki nonb kazye ki genyen antotal?

Montre travay ou.

Repons _____ kazye

43

Nan samdi, Cory ak Emma lave yon total de 5 machin. Cory te lave 3 machin e Emma te lave 2 machin. Konplete fraz nimerik ki anba a pou fè sa ekri senbòl $<$, $>$, oswa $=$ sou liy lan.

Fraz Nimerik 5 _____ 3 + 2

Semèn pase, Cory lave 17 machin e Emma lave 21 machin. Sou liy anba a, ekri yon fraz nimerik pou montre relasyon ki genyen ant kantite machin Cory te lave ak kantite machin Emma te lave semèn pase. Sèvi ak swa $<$ oswa $>$ nan fraz nimerik ou a.

Fraz Nimerik _____

Kontinye

44

Madàm Caldwell te plante yon pye pòm ki gen 6 pye 4 pous de wotè. Ki wotè pyebwa a, an pous?

Montre travay ou.

Repons _____ pous

45

Dennis plase 52 kokiy an 4 pil egal. Li ekri fraz nimerik ki pi ba a pou l jwenn kantite kokiy ki gen nan chak pil.

$$52 \div 4 = ?$$

Konbyen kokiy Dennis plase nan chak pil?

Repons _____ kokiy


Konplete fraz nimerik ki kapab itilize pou verifye si repons ou kòrèk.




Fraz Nimerik $4 \times \underline{\hspace{2cm}} = \underline{\hspace{2cm}}$

46

Piktogram lan montre kantite oto twa elèv te lave pandan yon sesyon lavaj oto pou kolekte lajan.

LAVAJ OTO ELÈV YO

LEJANN
 = 4 oto

Elèv	Kantite Oto ki te Lave
Christy	
David	
Mica	

Konplete **tablo** ki pi ba a pou montre kantite oto chak elèv te lave pandan lavaj oto an.

Asire ou

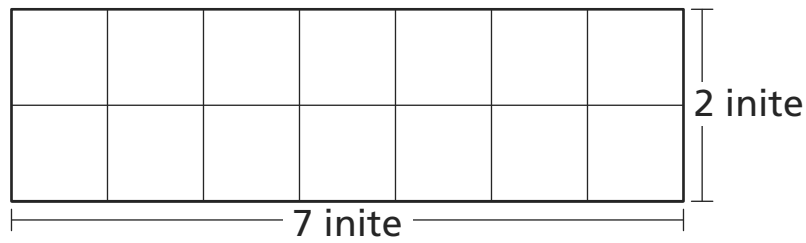
- mete tit pou tablo a
- mete tit epi konplete premye kolòn nan
- plase tout done yo

	Kantite Oto ki te Lave
David	

Kontinye

47

Jenny fè makè pou make paj liv yo montre pi ba a.



Ki **perimèt** makè pou make paj liv la, an inite?

Montre travay ou.

Repons _____ inite

Ki **sipèfisi** makè pou make paj liv la, an inite kare?

Repons _____ inite kare

48

Mesye Blake te kòmande 12 bwat bwòs penti. Te genyen 8 bwòs penti nan chak bwat. Konbyen bwòs penti Mesye Blake te kòmande antotal?

Montre travay ou.

Repons _____ bwòs penti

Mesye Blake te louvri kèk nan bwat bwòs penti yo lè yo te rive. Te gen yon total de 24 bwòs penti nan bwat li te louvri yo. Konbyen bwat Mesye Blake te louvri?

Repons _____ bwat

RETE LA

Place Student Label Here



Ane 4
Egzamen Matematik
Liv 3
2–6 mas 2009

Grade 4
Mathematics Test
Book 3
March 2–6, 2009